
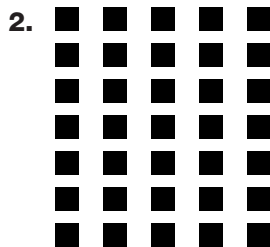


Divide by 5


Use the array to help you find the quotient.




$15 \div 5 = \underline{\quad}$



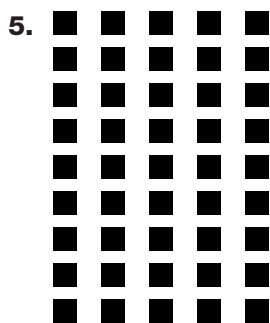
$35 \div 5 = \underline{\quad}$




$20 \div 5 = \underline{\quad}$



$30 \div 5 = \underline{\quad}$



$45 \div 5 = \underline{\quad}$



$25 \div 5 = \underline{\quad}$

Divide.

7. $5 \overline{)50}$

8. $5 \overline{)25}$

9. $2 \overline{)14}$

10. $5 \overline{)35}$

11. $2 \overline{)20}$

12. $5 \overline{)45}$

13. $5 \overline{)20}$

14. $2 \overline{)10}$

15. $5 \overline{)5}$

16. $5 \overline{)10}$

17. $15 \div 5$

18. $16 \div 2$

19. $40 \div 5$

20. $30 \div 5$

21. $20 \div 2$



Test Prep

22. Choose the quotient.

$45 \div 5 = \blacksquare$

A 7

C 8

B 9

D 10

23. Heather has 20 pennies. She divides her pennies into 5 equal piles. How many pennies are in each pile?
