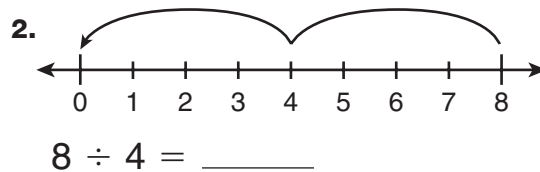
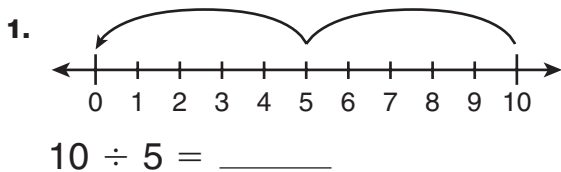
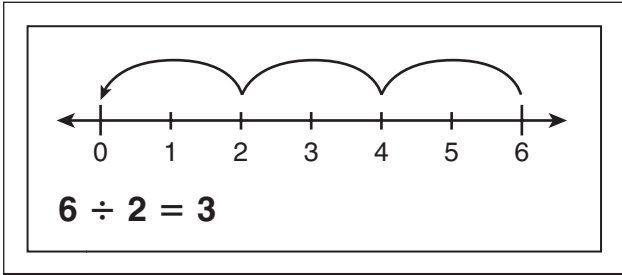
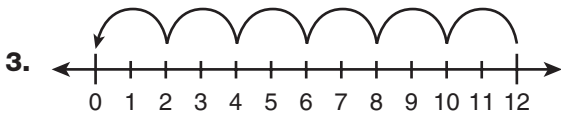


Model Division as Repeated Subtraction

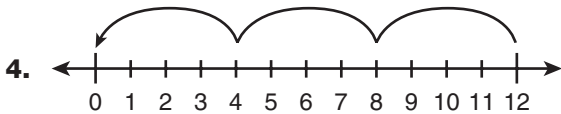
Use repeated subtraction on the number line to find each quotient.



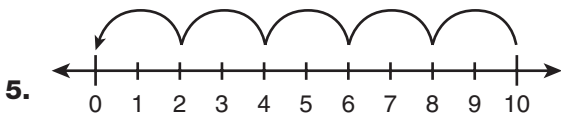
Match each number line with the correct division sentence.



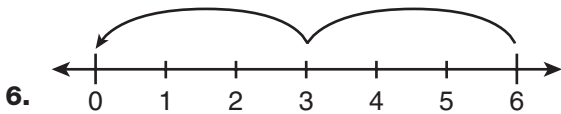
a. $10 \div 2 = \underline{\quad}$



b. $6 \div 3 = \underline{\quad}$



c. $12 \div 2 = \underline{\quad}$



d. $12 \div 4 = \underline{\quad}$

Problem Solving

7. There are 12 eggs in bird nests. Three eggs are in each nest. How many bird nests are there?
